

# Graphing Slope-Intercept Form

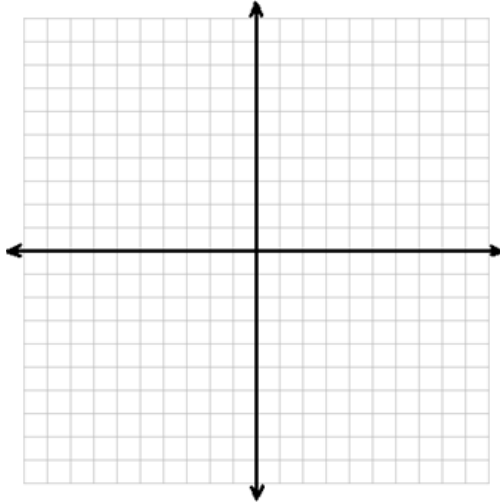
Name: \_\_\_\_\_

Complete the x-y table, then graph the linear equation.

1.  $y = \frac{3}{4}x - 1$

m: \_\_\_\_\_

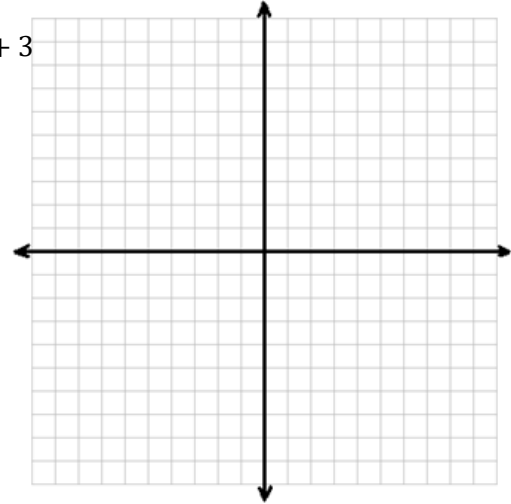
b: \_\_\_\_\_



2.  $y = -\frac{1}{2}x + 3$

m: \_\_\_\_\_

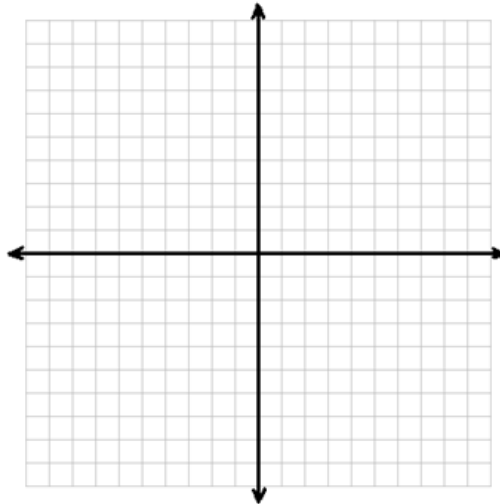
b: \_\_\_\_\_



3.  $y = \frac{2}{3}x - 4$

m: \_\_\_\_\_

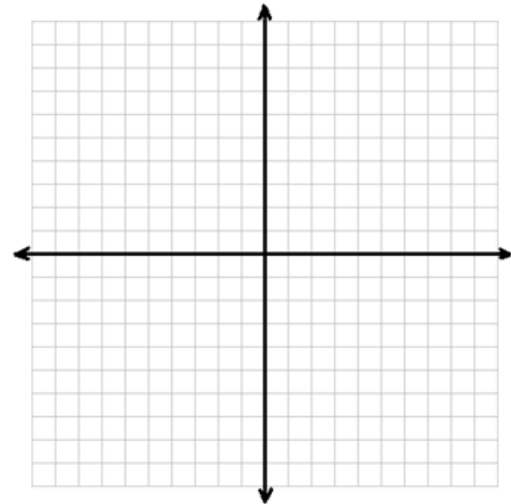
b: \_\_\_\_\_



4.  $y = -3x + 4$

m: \_\_\_\_\_

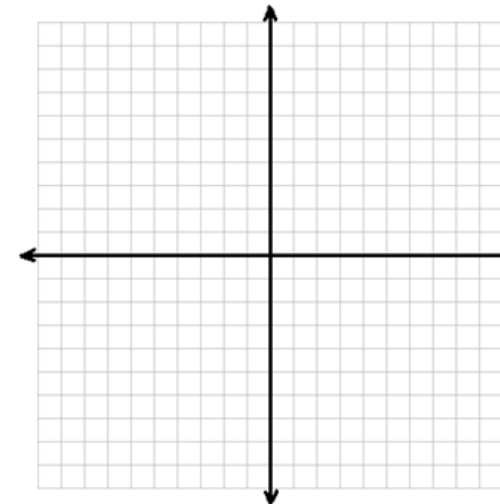
b: \_\_\_\_\_



5.  $y = -x + 1$

m: \_\_\_\_\_

b: \_\_\_\_\_



6.  $y = 2x - 3$

m: \_\_\_\_\_

b: \_\_\_\_\_

